
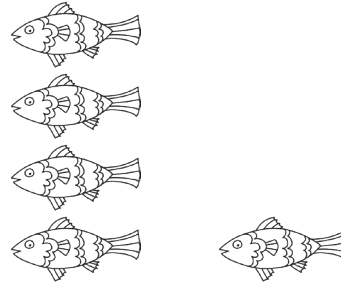


Name _____

Solve each problem.




$$2 + 2 = \underline{\quad}$$



$$4 + 1 = \underline{\quad}$$



$$1 + 3 = \underline{\quad}$$



$$3 + 2 = \underline{\quad}$$

Write each addition problem.



$$\underline{\quad} + \underline{\quad} = \underline{\quad}$$



$$\underline{\quad} + \underline{\quad} = \underline{\quad}$$

Do More!

Circle each problem that equals the number on the mushroom.



$3 + 1 \quad 2 + 3$

$1 + 2 \quad 4 + 1$



$1 + 3 \quad 3 + 2$

$1 + 1 \quad 2 + 2$